

**JKG International School, Indirapuram**  
**Holiday Homework :(2018-19)**  
**Class: I**  
**Subject: English**

**Name:** \_\_\_\_\_ **Sec:** \_\_\_\_\_ **Roll No.:** \_\_\_\_\_ **Date:** \_\_\_\_\_

**Q1. Read the given passage and answer the questions:**

Cranny- the crow gets a piece of cheese. He sits on the branch of a tree to eat it. Frixie -the fox sees Cranny. He wants that piece of cheese. Frixie is very clever. He tells Cranny that he has a very sweet voice. He wants to hear his song. Cranny opens his beak to sing. The cheese falls down. Fox runs away with the cheese.

a) What is the name of the crow?

Ans. \_\_\_\_\_

b) Who is frixie?

Ans. \_\_\_\_\_

c) Who gets a piece of cheese?

Ans. \_\_\_\_\_

d) Who is very clever?

Ans. \_\_\_\_\_

**Q 2. Look at the picture and fill in the blanks :**

Santa Claus	gifts	25 <sup>th</sup> December	Christmas
-------------	-------	---------------------------	-----------



a) This is the picture of \_\_\_\_\_.

b) He brings \_\_\_\_\_ for us.

c) He comes on \_\_\_\_\_

d) Christmas is celebrated on \_\_\_\_\_.

**Q3. Circle the describing words:**

- a) The roads are clean.
- b) This is a new dress.
- c) Ruchi is happy today.
- d) My bag is big.

**Q4. Fill in the blanks with in, on and under :**

- a) The mangoes are \_\_\_\_\_ the basket.



- b) The ball is \_\_\_\_\_ the table.



- c) The cat is \_\_\_\_\_ the mat.



**Q5. Put a full stop ( . ) or a question mark (?) for the given sentences :**

- a) The baby is drinking milk
- b) Who is celebrating his birthday
- c) Can you help me
- d) I am reading a book
- e) We are going to the market

जेकेजी इंटरनेशनल स्कूल, इंदिरापुरम  
शीतकालीन अवकाश कार्य (2018-19)

कक्षा : एक

विषय : हिंदी

नाम: .....

वर्ग: .....

अनुक्रमांक: .....

दिनांक .....

प्र०1 दिये गये अपठित गद्यांश को पढ़कर सही उत्तर पर निशान लगाइए ।

एक समय की बात है, एक नदी के किनारे बहुत बड़े वृक्ष पर कुछ बंदर बैठे थे। वे वृक्ष पर फल खाते थे। वे बहुत शैतान थे। एक दिन एक शिकारी आया और बंदरों को पकड़ कर अपने साथ ले गया ।

क) नदी के किनारे वृक्ष पर कौन बैठे थे ?

बंदर

हाथी

ख) बंदर कैसे थे ?

चलाक

शैतान

ग) उपर्युक्त गद्यांश में से दिए गए शब्दों के लिए समान लय वाले शब्द लिखिए ।

चल

हाथ

प्र०2 विशेषण शब्दों पर गोला लगाइए ।

क) मेरे पास लाल टमाटर है ।

ख) लीची मीठी है ।

ग) रीया सुंदर है ।

प्र०3 संज्ञा शब्द लिखिए ।

क) मित्रों के नाम

\_\_\_\_\_

\_\_\_\_\_

ख) फलों के नाम

\_\_\_\_\_

\_\_\_\_\_

ग) जानवरों के नाम

\_\_\_\_\_

\_\_\_\_\_

घ) वस्तु के नाम

\_\_\_\_\_

\_\_\_\_\_

प्र०4 निम्नलिखित अंकों को शब्दों में लिखिए ।

१

\_\_\_\_\_

२

\_\_\_\_\_

५

\_\_\_\_\_

४

\_\_\_\_\_

७

\_\_\_\_\_

६

\_\_\_\_\_

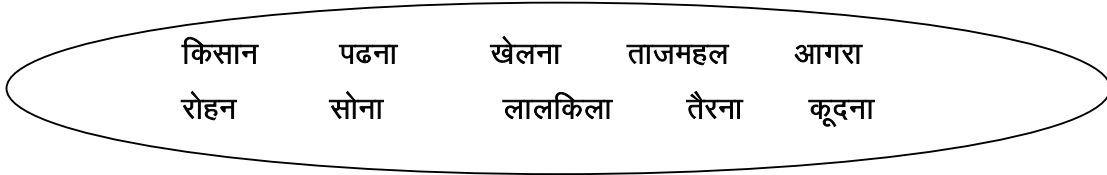
प्र०5 रचनात्मक लेख पूरा किजिए

- क) मेरी माँ का नाम ----- है ।  
ख) मेरी माँ मुझे ----- बातें बताती है ।  
ग) मेरी माँ मुझे ----- है ।  
घ) मेरी माँ मेरे लिए स्वादिष्ट ----- बनाती है ।  
ङ) मैं अपनी माँ से ----- करता हूँ करती हूँ।

प्र०6 पदेन ( / , ^ ) की मात्रा के शब्दों पर गोला लगाइए।

नर्स	किसान
कल	सर्दी
ग्रामीण	समुद्र
बर्तन	प्रधान

प्र०7 क्रिया तथा संज्ञा शब्द छाँट कर सही जगह पर लिखिए।



संज्ञा

---

---

---

---

---

क्रिया

---

---

---

---

---

**JKG International School, Indirapuram**  
**Holiday Homework: (2018-19)**  
**Class: I**  
**Subject: Math**

Name: .....Section:..... Roll No.: .....Date: .....

**Q1. Tick (✓) and write the correct option:**

a)  $16 + 3 =$  \_\_\_\_\_.

- (i) 5                                      ii) 18                                      iii) 9

b)  $15 - 3 =$  \_\_\_\_\_

- (i) 10                                      ii) 16                                      iii) 12

c) The last month of the year is \_\_\_\_\_.

- (i) November                              ii) December                              iii) May

d) The Symbol used for rupees is \_\_\_\_\_

- (i) \$                                      ii) P                                      iii) ₹

e) The next number in the Pattern 3,6,9 is \_\_\_\_\_

- (i) 14                                      ii) 12                                      iii) 16

**Q2. Subtract:**

a) 
$$\begin{array}{r} T \quad O \\ 5 \quad 7 \\ - \quad 4 \\ \hline \end{array}$$

b) 
$$\begin{array}{r} T \quad O \\ 9 \quad 6 \\ - \quad 3 \\ \hline \end{array}$$

c) 
$$\begin{array}{r} T \quad O \\ 8 \quad 3 \\ - \quad 0 \\ \hline \end{array}$$

d) 
$$\begin{array}{r} T \quad O \\ 4 \quad 9 \\ - \quad 5 \\ \hline \end{array}$$

**Q3. Add:**




a) 
$$\begin{array}{r} T \quad O \\ 6 \quad 8 \\ + \quad 3 \\ \hline \end{array}$$

b) 
$$\begin{array}{r} T \quad O \\ 1 \quad 7 \\ + \quad 1 \\ \hline \end{array}$$


c) 
$$\begin{array}{r} T \quad O \\ 5 \quad 7 \\ + \quad 5 \\ \hline \end{array}$$

d) 
$$\begin{array}{r} T \quad O \\ 2 \quad 7 \\ + \quad 3 \quad 9 \\ \hline \end{array}$$


**Q4. Fill in the blanks:**

- a) Subtraction means to \_\_\_\_\_.
- b) When we add 1 to any number we get the \_\_\_\_\_ number.
- c)    \_\_\_\_\_ , \_\_\_\_\_ .
- d) The short hand tells the time in \_\_\_\_\_.
- e)  $27 + 3 =$  \_\_\_\_\_ .

**Q5. Look at the pictures and write the time shown:**




\_\_\_\_\_ o'clock




\_\_\_\_\_ o'clock

**Q6. Draw the long and short hands on the faces of clocks to show the given time:**



**12 o'clock**



**8 o'clock**

**JKG International School, Indirapuram  
Holiday Homework (2018-19)**

**Class: I  
Subject: EVS**

**Name:** \_\_\_\_\_ **Sec:** \_\_\_\_\_ **Roll No.:** \_\_\_\_\_ **Date:** \_\_\_\_\_

**Q1. Tick (√) the right answer:**

- a) We live on \_\_\_\_\_.
- (i) Moon       (ii) Sun       (iii) Earth
- b) A \_\_\_\_\_ is pulled by animals.
- (i) tonga       (ii) car       (iii) bus
- c) Rivers and lakes are \_\_\_\_\_ bodies.
- (i) water       (ii) land       (iii) air
- d) We see stars during the \_\_\_\_\_.
- (i) day       (ii) night       (iii) afternoon
- e) Scooter, motorcycle, car and bus are means of \_\_\_\_\_ transport.
- (i) land       (ii) air       (iii) water

**Q2. Write 'T' for true and 'F' for false for the following statements:**

- a) A school bus is a road transport. [    ]
- b) A rainbow is seen in the sky everyday. [    ]
- c) It is dark at night. [    ]
- d) We should keep our surroundings clean. [    ]
- e) Metro rail runs in villages. [    ]

**Q3. Answer the following in brief:**

a) Which planet is called the 'Blue Planet'?

Ans. \_\_\_\_\_

b) How many planets are there?

Ans. \_\_\_\_\_

c) What do we call means of transport?

Ans. \_\_\_\_\_

**Q4. Name the means of transport that you use to go to the following places:**

a) School \_\_\_\_\_

b) Doctor or hospital \_\_\_\_\_

c) Friend's house \_\_\_\_\_

d) Market or shopping mall \_\_\_\_\_

**Q 5. Name two means of transport for the following:**

a) Land transport \_\_\_\_\_

b) Air transport \_\_\_\_\_

c) Water transport \_\_\_\_\_

**Q 6. Draw, label and colour the picture of any one festival:**